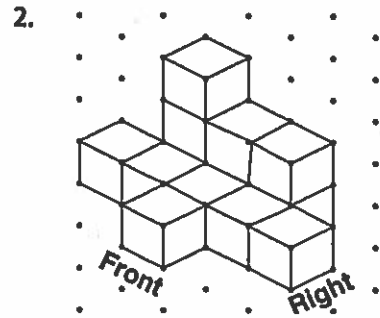
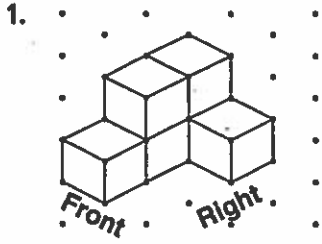


# Practice 8-2

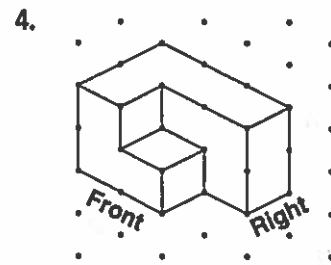
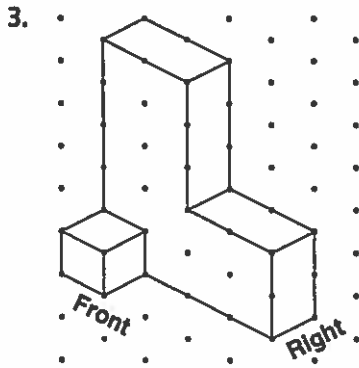
## Drawing Views of Three-Dimensional Figures

Draw a base plan for each set of stacked cubes.



All rights reserved.

Draw the top, front, and right views of each figure.



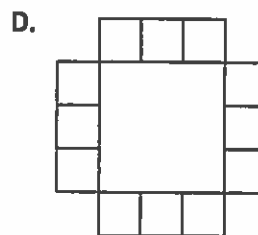
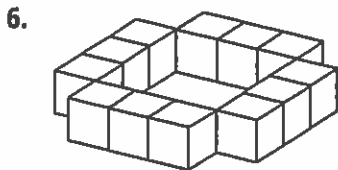
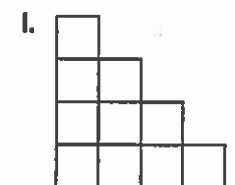
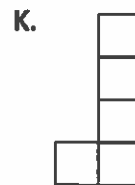
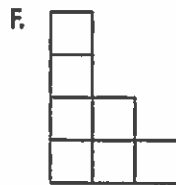
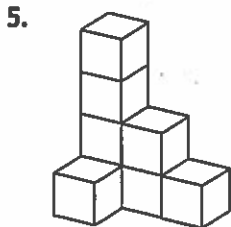
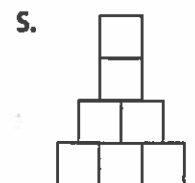
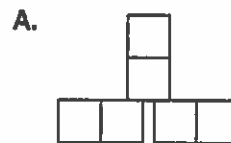
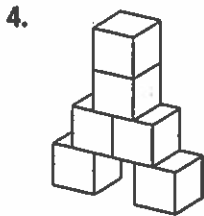
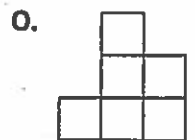
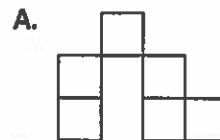
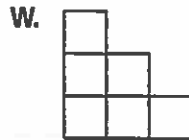
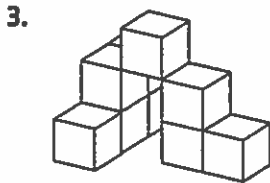
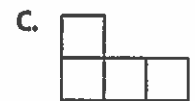
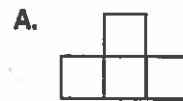
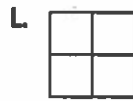
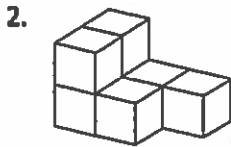
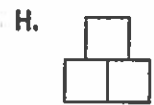
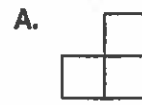
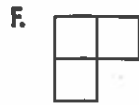
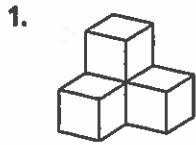
© Pearson Education, Inc., publishing as Pearson Prentice Hall.

# Puzzle 8-2

## Drawing Views of Three-Dimensional Figures

For each isometric view shown, circle the letter of the view that is NOT possible.

© Pearson Education, Inc., publishing as Pearson Prentice Hall. All rights reserved.



Which state is completely surrounded by water?

- \_\_\_\_\_
- 1    2    3    4    5    6